

ALL INDIA SCHOOL SCHOLARSHIP EXAMINATION

Time: 2 Hrs.






Class: K.G.
(English Medium)

M.M. 100

Examination Centre _____

Roll No. _____






1. Fill up with the help of pictures : (10)

| | | | | | |
|---|-----------|---|-----------|---|-----------|
|  | = P ___ N |  | = C ___ P |  | = C ___ R |
|  | = E ___ G |  | = D ___ G | | |






2. Complete it : (10)

A _____ C _____ E _____ G H _____ J _____
 K _____ M _____ O _____ Q _____ S _____
 U V _____ X Y _____









3. Match the picture with correct words : (10)

| | |
|---|-----------|
|  | DUCK |
|  | FLOWER |
|  | FLAG |
|  | UMBRELLA |
|  | ICE-CREAM |

4. Tick (✓) 'This' or 'That' : (10)

| | |
|---|-----------------------------|
|  | This / That is a car . |
|  | This / That is a lion. |
|  | This / That is a tree. |
|  | This / That is an umbrella. |
|  | This / That is a fish. |

5. Fill up with the help of numbers : One is given for Example. (10)

| | | | |
|---|-----------|-----------|---|
|  | One ball | Two balls |  |
|  | One fish | Two _____ |  |
|  | One boy | Two _____ |  |
|  | One apple | Two _____ |  |
| ★ | One star | Two _____ | ★ ★ |

MATHEMATICS

1. Count the pictures and write :

(5)

| | | |
|---|---|-------|
|  | = | _____ |
|  | = | _____ |
|  | = | _____ |
|  | = | _____ |
|  | = | _____ |

2. Write down the counting :

(10)

| | | | | | | | | | | |
|----|--|--|--|--|--|--|--|--|--|----|
| 31 | | | | | | | | | | |
| | | | | | | | | | | 50 |

3. Arrange the numbers in the correct order :

(4)

18, 16, 13, 15, 14, 19, 17 _____

4. Use the sign > or < :

(3)

- | | | |
|----------------|----------------|-----------------|
| i) 23 ____ 32 | ii) 16 ____ 20 | iii) 44 ____ 47 |
| iv) 71 ____ 75 | v) 90 ____ 100 | vi) 50 ____ 52 |

5. What comes before :

(6)

- | | | |
|-------------|--------------|---------------|
| i) _____ 5 | ii) _____ 12 | iii) _____ 47 |
| iv) _____ 9 | v) _____ 18 | vi) _____ 62 |

6. What comes between :

(6)

- | | | |
|----------------|----------------|-----------------|
| i) 4 ____ 6 | ii) 17 ____ 19 | iii) 42 ____ 44 |
| iv) 60 ____ 62 | v) 83 ____ 85 | vi) 93 ____ 95 |

7. What comes after :

(6)

- | | | |
|--------------|--------------|---------------|
| i) 8 _____ | ii) 26 _____ | iii) 53 _____ |
| iv) 67 _____ | v) 99 _____ | vi) 90 _____ |

8. Write in words :

(10)

- 1 = _____
- 4 = _____
- 13 = _____
- 10 = _____
- 40 = _____